

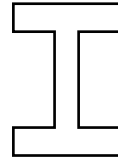
Symmetry

How many lines of symmetry does each figure have? You may fold your paper to check.

1.



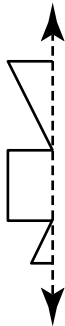
2.



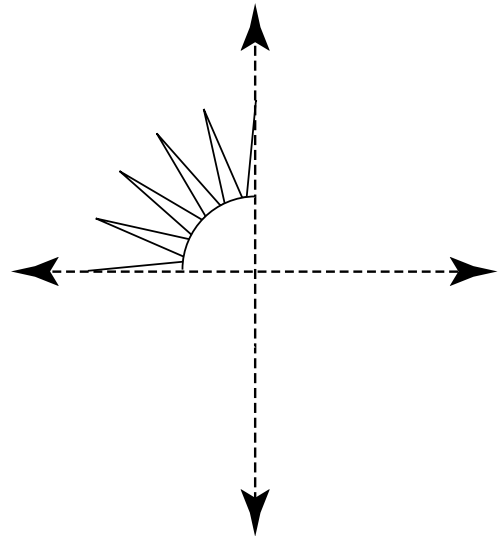
3. **Reasoning** How many lines of symmetry does an equilateral triangle have? Explain.

Part of a symmetric trademark is shown. Complete each drawing.

4.




5.




Test Prep

6. Which figure has more than two lines of symmetry?

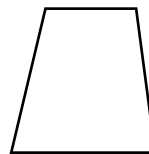
A.




B.



C.



D.



7. **Writing in Math** Draw a shape or figure that has more than 2 lines of symmetry. Put the lines of symmetry into your drawing.