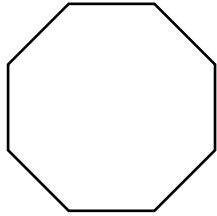


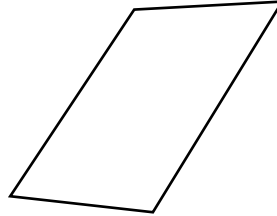
Polygons

Name each polygon. Then tell if it appears to be a regular polygon.

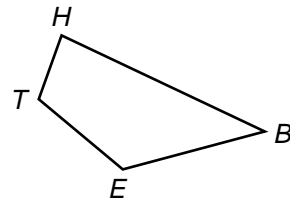
1.



2.



3. Name the polygon. Name the vertices.



Test Prep

4. Which polygon has eight sides?

- A.** Quadrilateral **B.** Pentagon **C.** Hexagon **D.** Octagon

5. **Writing in Math** Draw two regular polygons and two that are irregular. Use geometric terms to describe one characteristic of each type.

