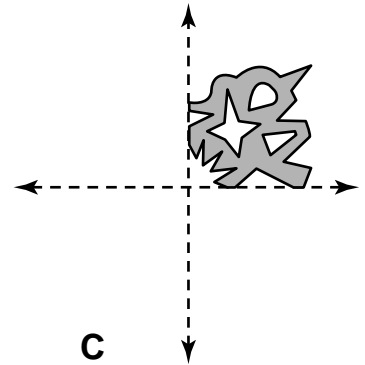
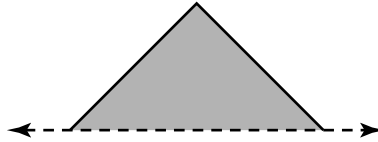
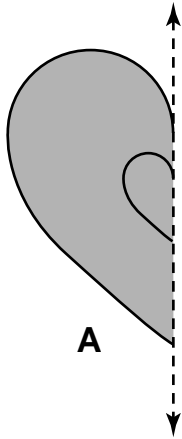


Symmetry

1. Complete the drawings using the dotted line as the line of symmetry.



A

B

C

2. How many lines of symmetry does figure A have?

3. Does figure B have a second line of symmetry?

4. A square has a horizontal and a vertical line of symmetry. What is a third line of symmetry?

5. **Writing in Math** Explain how symmetry and a flip transformation are alike.
