


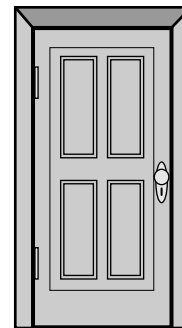
Classifying Quadrilaterals

Shapes As part of the real world, there are many things that could be identified as quadrilaterals. Their angles and sides determine what type of quadrilateral they are. For each quadrilateral shown or described, tell the geometric name.

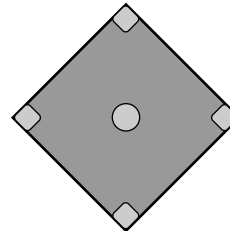
1. The shape of the necklace is what type of quadrilateral?



2. The shape of the shaded part of the frame of the doorway is what type of quadrilateral?



3. The shape of the baseball diamond is what type of quadrilateral?



4. **Writing in Math** The qualities of a square match the definition of two types of parallelograms. Name both and explain the characteristics for each definition.

